

GWALIOR GLORY SCHOOL

WINTER HOLIDAY HOMEWORK

ENGLISH (2024-25)

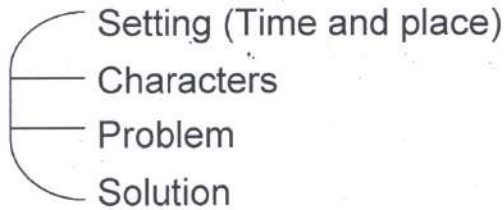
Class : IV

Name : _____ Sec. : _____ Roll No. : _____ Date : _____


(1) **Creative +** learnt a new thought every week in past few months. So, now is the time to recall your favourite 'Thought of the Week'! Write it on an A-4 size sheet using calligraphic fonts. Use your creativity to make it beautiful by using textures and drawing borders.

(2) **Writing Skills:**

'Elements of a story'



Read L-14 'The Fifth Golden Ticket' by Roald Dahl and present the elements of the story on A-4 sheet in a creative manner. (Refer to the given picture.)



(3) Parts of Speech:

Identify the different parts of speech and write them.

<u>PARTS OF SPEECH</u>				
me	Mary	she	I	did
America	know	quickly	in	blue
and	excellent	on	ouch!	But
cat	under	Shh!	kindly	herself
so	want	easy	slowly	Phew!
He	be	hose	carefully	Wow!
between	run	or	pen	modern
pretty	now	if	Gosh!	behind

Noun

Verb

Pronoun

Adjective

Adverb

Preposition

Conjunction

Interjection

(4) Prefixes:

Prefixes are added to the beginning of root or base words. When you add a prefix to a base word, you change the word's meaning.

re — again, back

dis — not

pre — before

un — not, opposite

mis — wrong

under — below

Directions: Write the correct prefix next to each base word.

_____ play	To play again
_____ age	Below age
_____ print	To print incorrectly or wrongly
_____ able	Not able
_____ heat	To heat before
_____ wind	To wind back or again
_____ honest	Not honest
_____ treat	To treat wrongly or badly
_____ tied	Not tied
_____ water	Below the water
_____ happy	Not happy
_____ view	To view before

(5) THE 3 WORDS GAME:-

Think of 3 words which start with ST-

Think of 3 words which end in -ER

Think of 3 words which rhyme with Day

Think of 3 words which start with TR-

Think of 3 words which end in -FUL

Think of 3 words which start with RE-

Think of 3 words which start with IN-

Think of 3 words which end in -ION

Think of 3 words which rhyme with SPOON

GWALIOR GLORY SCHOOL

WINTER HOLIDAY HOMEWORK

HINDI (2024-25)

Class : IV

Name : _____ Sec. : _____ Roll No. : _____ Date : _____

- (1) प्रतिदिन एक पेज सुलेख का अभ्यास करो।
- (2) अपनी पाठ्यपुस्तक एवं पुस्तिका में किए गए कार्य को याद करो।
- (3) यदि चंद्रयान-3 से जुड़े वैज्ञानिक आपके विद्यालय में आएँ तो आप उनके कौन-से प्रश्न पूछना चाहोगे? कोई तीन प्रश्न लिखो।









प्र01

प्र02

प्र03

- (4) भारत के पूर्वोत्तर क्षेत्र में आठ प्रदेश हैं ये अपनी प्राकृतिक सुंदरता और विविध परंपराओं हेतु प्रसिद्ध हैं। ये आठ प्रदेश कौन-से हैं लिखिए।

जैसे:-



(5) दी गई वर्ग पहली में खेलों के नाम दिए गए हैं उन्हें ढूँढ़िए और गोला बनाइए।

क	फ्रि	वाँ	रा	पि	जा
गु	के	ली	नी	ट्	कि
फु	ट	बाँ	ल	ठू	ब
डा	हु	ल	खो	हाँ	की
बु	या	य	खो	न	त
ओ	गि	ल्	ली	डं	डा

(6) दिए गए मुहावरों के अर्थ लिखकर उनके वाक्यों में प्रयोग करो।

(1) आकाश से बातें करना।

अर्थ — _____

वाक्य — _____

(2) पीठ थपथपाना।

अर्थ — _____

वाक्य — _____

(3) लाल-पीला होना।

अर्थ — _____

वाक्य — _____


(4) चेहरा खिल उठना।

अर्थ — _____

वाक्य — _____

(7) चित्रों को देखकर कहानी को अपने शब्दों में पूरी करो:—


(1)



(2)




(3)



(2)




(3)



(4)




(5)



(4)



(5)



GWALIOR GLORY SCHOOL

WINTER HOLIDAY HOMEWORK MATHEMATICS (2024-25)

Class : IV

Name : _____ Sec. : _____ Roll No. : _____ Date : _____

(1) Find these words from the mirror images given here:

yoj

WON

deve

bud

KID

CODE

BOY

Complete the words by writing the mirror image of the given part.

(2) Dhoni and his friends were playing a cricket match. Dhoni scored exactly a century and his teammates scored 7 less, Sanjay scored 14 less, Vinu scored 22 less and David scored 9 more than Dhoni.

Using above information fill in the blanks.

(i) Dhoni scored $90 + \underline{\hspace{2cm}} + \underline{\hspace{2cm}} = \underline{\hspace{2cm}}$ runs.

(ii) Virat scored $\underline{\hspace{2cm}}$ and needed $\underline{\hspace{2cm}}$ runs to complete a century.

(iii) Sanjay scored $\underline{\hspace{2cm}}$ and needed $\underline{\hspace{2cm}}$ runs to complete a century.

(iv) Vinu scored $\underline{\hspace{2cm}}$ and they are $\underline{\hspace{2cm}}$ less than David.

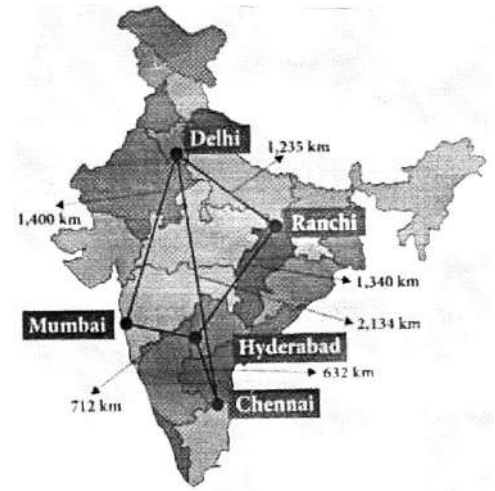
(v) David scored $\underline{\hspace{2cm}}$ and they are $\underline{\hspace{2cm}} + \underline{\hspace{2cm}}$ more than Virat.

(3) How can you make number six with these three matchsticks without cutting them.



(4) Using only addition, add eight 8's to get the number 1000.

(5) A one-day cricket series between India and England will be played in 5 different cities—Delhi, Mumbai, Ranchi, Chennai and Hyderabad.



a) How much distance will the teams travel, if they start from Mumbai, travel to Delhi and finally go to Chennai _____.

b) After the match in Chennai England team travelled to Hyderabad and then to Ranchi. Indian team travelled to Delhi. Which team travelled more distance and how much more?

(7) Mr. Sharma creates a table that shows some of the highest mountain in the world. Help him find out the height of each mountain in metres by adding the numbers given in table. If you find the number in the number grid (up, down, left or right)

Name of the mountain	Height	Number grid
Mount Everest	7500m + 76000cm + 34400cm + 244m	Number Grid
K2	7km + 869m + 41000cm + 328cm	8 8 5 8 6 1
Kanchanjunga	6km + 1,200m + 756m + 630m	8 5 8 8 8 6
Makalu	6km + 950m + 1,531m	4 3 1 4 6 8
Dhaulagiri	7400m + 72000cm + 4700cm	8 6 6 8 1 5
Noshaq	6200m + 29,200m + 1,000m	6 8 4 8 1 1
		0 7 4 9 2 6
		7 6 1 5 3 4
		7 5 8 2 0 1
		8 1 6 7 4 9

GWALIOR GLORY SCHOOL

WINTER HOLIDAY HOMEWORK SCIENCE (2024-25)

Class : IV

Name: _____ Sec. : _____ Roll No. : _____ Date : _____

(1) PROJECT

- NOTE:-** (a) Do any one project out of the two.
(b) Submit it by 18th January 2025
(c) This project will be marked for Term-II

PROJECT-1:- Make a model / or draw a picture of sea breeze (Roll No. 1 – 6) and land breeze (Roll No. 7 – 13) using waste materials like cardboard, newspaper etc. (For model work, reference video will be sent in class group.)

OR

PROJECT-2:- On an A-4 sheet stick pictures of the traditional costumes of the given states. Write the name of the state and the name of the costume (male and female both).

- (a) Rajasthan (b) Kerala (c) Punjab
(d) Nagaland (e) Jammu and Kashmir

(2) The ultimate source of heat and light energy on Earth is the Sun. Sun is an English word. On an A-4 size draw the picture of the Sun and write what it is called in different languages given below:-

- (a) French (b) Hindi (c) Spanish
(d) Portuguese (e) Latin (f) German

(3) Birds that travel from one place to another in search of food, water and safe places to breed and raise their young ones, are called **MIGRATORY BIRDS**. Every year numerous birds migrate. List down names of 4 migratory birds stick / draw their pictures & write their names. Also, mention the name of the country from which and where they fly.

(4) **ANIMAL CONNECTIONS**

Try to move from the start to the end by following the chain of animals. Total number of animals are 24. First three have been done for you. (Take help from the help box. You can move in any direction – up, down, right or left)

↓ **START**

Y	D	T	Y	Q	E	R	A	B	B	I	L	J	O	I	P	S	V	K
Z	O	B	T	I	G	F	C	V	P	T	O	R	T	S	D	P	H	A
L	G	O	A	H	S	R	U	T	C	P	Z	X	C	E	L	E	V	N
U	B	Z	X	C	V	K	H	W	E	N	O	I	L	S	V	N	M	T
K	F	J	K	L	D	E	V	D	C	X	Z	C	E	E	L	T	R	U
A	G	N	A	K	A	Y	Q	W	E	R	T	P	N	G	U	P	X	T
R	D	N	Q	W	P	R	W	P	B	C	W	K	L	R	A	T	R	E
O	Y	R	I	C	H	Y	E	N	A	L	L	T	B	O	K	P	Q	E
O	S	T	Z	X	C	V	B	C	B	Q	I	G	A	T	H	J	Q	F
K	F	B	F	D	W	Q	X	T	P	R	P	H	J	K	O	G	O	R
Q	W	T	Y	X	O	L	L	I	D	A	M	G	R	Z	R	D	L	K
C	V	B	G	M	C	M	N	Q	Z	C	R	A	L	L	I	P	H	J
Q	W	R	P	O	T	P	Q	D	S	T	N	Q	B	N	G	T	Y	U
E	R	W	U	R	G	B	O	A	L	A	N	J	K	L	Z	P	Q	W
T	Y	L	S	K	U	N	K	P	Y	J	T	E	A	T	E	R	X	Z

END ↓

HELP BOX (Few are done for you) (Total 24 are there)

- | | | | | |
|---------------|----------------|----------------|---------------|---------------|
| (1) alligator | (2) hyena | (3) rat | (4) dog | (5) anteater |
| (6) kangaroo | (7) Koala | (8) eel | (9) tiger | (10) tortoise |
| (11) newt | (12) turtle | (13) Yak | (14) skunk | (15) rabbit |
| (16) turkey | (17) ostrich | (18) tree frog | (19) octopus | (20) lion |
| (21) gorilla | (22) armadillo | (23) goat | (24) elephant | |

3) Complete the list of Presidents of India in a row along with the years they served.

Sr. No.	Names	Year (Period Served)
1.	Dr. Rajendra Prasad	_____
2.	_____	1962 – 1967
3.	Dr. Zakir Husain	_____
4.	_____	1969 – 1974
5.	Fakhruddin Ali Ahmed	_____
6.	_____	1977 – 1982
7.	Giani Zail Singh	_____
8.	_____	1987 – 1992
9.	Shankar Dayal Sharma	_____
10.	Kocheril Raman Narayanan	_____
11.	_____	2002 – 2007
12.	_____	2007 – 2012
13.	Pranab Mukherjee	_____
14.	_____	2017 – 2022
15.	_____	2022 till date

4) My Own Fingerprints

Use poster colour and trace each finger in the box given and solve the questions.



Arch



Loop



Whorl

My Left Hand

--	--	--	--	--

My Right Hand

--	--	--	--	--

I have _____ arches _____ loops _____ whorls

GWALIOR GLORY SCHOOL

Class : IV

WINTER HOLIDAY HOMEWORK

GK (2024-25)


Name : _____ Sec. : _____ Roll No. : _____ Date : _____


1) Sporting Nicknames!

Here are the nicknames of some famous sports persons. Write their original names and draw the sport associated with them.

1) Master Blaster

2) Grandmaster





3) CR7

4) Hockey Wizard





5) Magnificent Mary

6) Sarpanch






2)

SCRABBLE TIME

Add up your words using the scramble tiles and write the total.



Word	Total


Word	Total

MY ACQUIRED KNOWLEDGE!

Write the names of the current Prime Minister, President, Home Minister, Railway Minister and Education Minister of your country and paste their pictures on an A-4 size sheet.

3) Let's create our own planet!

ADD YOUR OWN PLANET
TO THIS SOLAR SYSTEM!



Use your imaginative skills
and draw your planet here!

What is your planet called?

What is it like there?


How's the weather?

Are there any cool animals? Name them.

Are there any curious plants? Name them.

3) Let's create our own planet!

ADD YOUR OWN PLANET
TO THIS SOLAR SYSTEM!



Use your imaginative skills
and draw your planet here!

What is your planet called?

What is it like there?

How's the weather?

Are there any cool animals? Name them.

Are there any curious plants? Name them.

GWALIOR GLORY SCHOOL

Class : IV

WINTER HOLIDAY HOMEWORK COMPUTER (2024-25)

Name : _____ Sec. : _____ Roll No. : _____ Date : _____

- (1) Prepare a creative power point presentation of 10 – 12 slides using colorful clip arts, backgrounds, graphs or pictures on a given topic:

“The sweet story of Chocolate

→ Its Origin and Varieties”

GWALIOR GLORY SCHOOL

Class : IV

WINTER HOLIDAY HOMEWORK COMPUTER (2024-25)

Name : _____ Sec. : _____ Roll No. : _____ Date : _____

- (1) Prepare a creative power point presentation of 10 – 12 slides using colorful clip arts, backgrounds, graphs or pictures on a given topic:

“The sweet story of Chocolate

→ Its Origin and Varieties”

GWALIOR GLORY SCHOOL

Class : IV

WINTER HOLIDAY HOMEWORK COMPUTER (2024-25)

Name : _____ Sec. : _____ Roll No. : _____ Date : _____

- (1) Prepare a creative power point presentation of 10 – 12 slides using colorful clip arts, backgrounds, graphs or pictures on a given topic:

“The sweet story of Chocolate

→ Its Origin and Varieties”